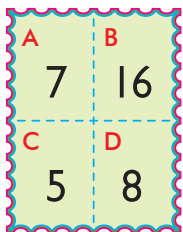


Práctica - adición y sustracción

Halla las sumas y las diferencias. Emplea los números que hay en las estampillas.

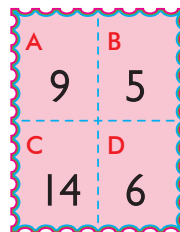


$A + C = \underline{\quad}$

$B - A = \underline{\quad}$

$B - D = \underline{\quad}$

$D + A = \underline{\quad}$

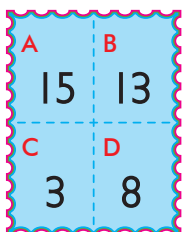


$D + B = \underline{\quad}$

$C - B = \underline{\quad}$

$C - D = \underline{\quad}$

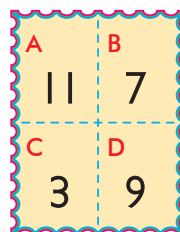
$B + A = \underline{\quad}$



$A - D = \underline{\quad}$

$D + C = \underline{\quad}$

$B - D = \underline{\quad}$

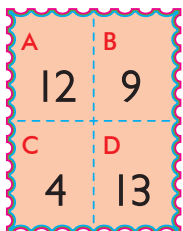


$D + B = \underline{\quad}$

$A - C = \underline{\quad}$

$A - B = \underline{\quad}$

$D + C = \underline{\quad}$

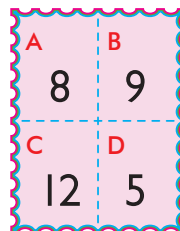


$A - C = \underline{\quad}$

$C + B = \underline{\quad}$

$B + B = \underline{\quad}$

$D - C = \underline{\quad}$

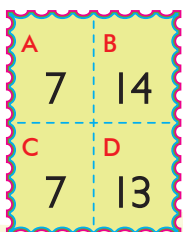


$A + D = \underline{\quad}$

$B + A = \underline{\quad}$

$C - B = \underline{\quad}$

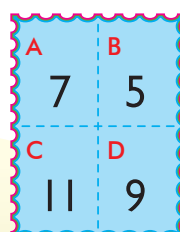
$C - D = \underline{\quad}$



$D - A = \underline{\quad}$

$B - A = \underline{\quad}$

$A + C = \underline{\quad}$



$A + C = \underline{\quad}$

$D + B = \underline{\quad}$

$C - B = \underline{\quad}$

$D - A = \underline{\quad}$