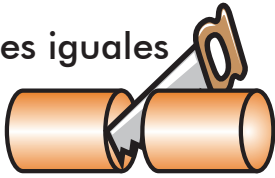


Fraccionarios: un medio, un tercio, un cuarto

2 partes iguales



$$\frac{1}{2} \quad \frac{1}{2}$$

Cada parte es un medio.

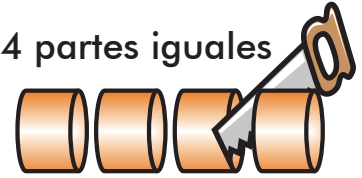
3 partes iguales



$$\frac{1}{3} \quad \frac{1}{3} \quad \frac{1}{3}$$

Cada parte es un tercio.

4 partes iguales

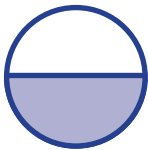


$$\frac{1}{4} \quad \frac{1}{4} \quad \frac{1}{4} \quad \frac{1}{4}$$



Cada parte es un cuarto.

Marca con una X la figura que indica cada fracción.



un medio $\frac{1}{2}$



un tercio $\frac{1}{3}$




un cuarto $\frac{1}{4}$




Encierra el fraccionario correcto.



$$\frac{1}{2} \quad \frac{1}{3} \quad \frac{1}{4}$$



$$\frac{1}{2} \quad \frac{1}{3} \quad \frac{1}{4}$$



$$\frac{1}{2} \quad \frac{1}{3} \quad \frac{1}{4}$$



$$\frac{1}{2} \quad \frac{1}{3} \quad \frac{1}{4}$$